

ESERCIZI SU AMMINE

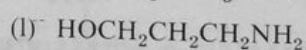
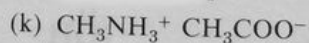
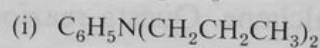
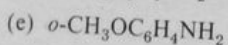
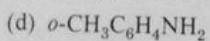
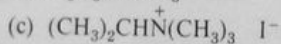
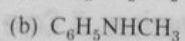
Problemi

19.25 Scrivere le formule di struttura dei seguenti composti.

- ~~(a)~~ Metilbenzilammina
- ~~(b)~~ Triisopropilammina
- ~~(c)~~ *N*-Metil-*N*-etilnilina
- ~~(d)~~ _____
- ~~(e)~~ 2-Metilpirrolo
- ~~(f)~~ *N*-Etilpiperidina

- ~~(k)~~ Cloruro di dimetilammonio
- ~~(l)~~ _____
- ~~(m)~~ Cloruro di tetrapropilammonio
- ~~(n)~~ _____
- ~~(o)~~ 4-Metossianilina (*p*-anisidina)
- ~~(p)~~ Idrossido di tetrametilammonio

19.26 Assegnare a ciascuno dei seguenti composti il nome corrente o quello IUPAC.



19.27 Scrivere le equazioni chimiche delle reazioni che permettono di preparare la benzilammina partendo da _____